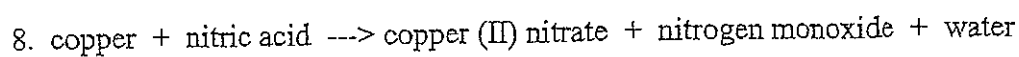
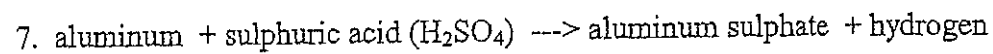
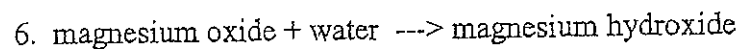
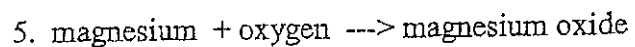
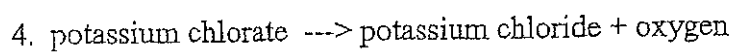
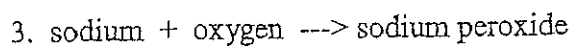
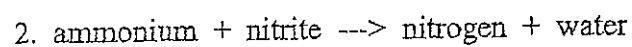
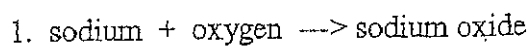
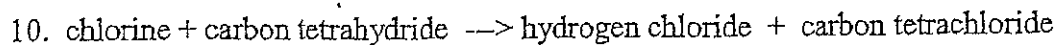
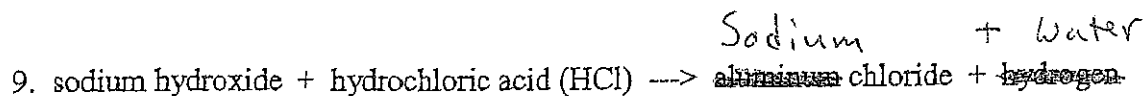


Name \_\_\_\_\_  
Date \_\_\_\_\_  
Hour \_\_\_\_\_

### Practice With Writing Chemical Equations

PART A - Write the proper formulas for the equations below and balance them by placing the correct whole number coefficients in front of each formula.





PART B - Balance the following equations by placing correct whole number coefficients in the blanks. Also identify what type of chemical reaction is occurring.

*Do #5 + #8 Last Large Coefficients*

